

AS LEVEL

Examiners' report

PHYSICS A

H156

For first teach in 2015

H156/02 Autumn 2020 series

Introduction

Our examiners' reports are produced to offer constructive feedback on candidates' performance in the examinations. They provide useful guidance for future candidates.



Reports for the Autumn 2020 series will provide a broad commentary about candidate performance, with the aim for them to be useful future teaching tools. As an exception for this series they will not contain any questions from the exam paper nor examples of candidate responses.

The reports will include a general commentary on candidates' performance, identify technical aspects examined in the questions and highlight good performance and where performance could be improved. The reports will also explain aspects which caused difficulty and why the difficulties arose, whether through a lack of knowledge, poor examination technique, or any other identifiable and explainable reason.

A full copy of the exam paper and the mark scheme can be downloaded from OCR.

Would you prefer a Word version?

Did you know that you can save this PDF as a Word file using Acrobat Professional?

Simply click on **File > Export to** and select **Microsoft Word**

(If you have opened this PDF in your browser you will need to save it first. Simply right click anywhere on the page and select **Save as . . .** to save the PDF. Then open the PDF in Acrobat Professional.)

If you do not have access to Acrobat Professional there are a number of **free** applications available that will also convert PDF to Word (search for PDF to Word converter).

Paper 2 series overview

A good range of marks were achieved by candidates and it did not appear that candidates were short of time. There are several questions on the paper which test the practical skills that candidates should have experienced in their AS course.

Candidates should be encouraged to show their working in numerical questions. It is important for all candidates to understand key command terms such as state, describe, define, etc.

There were two Levels of Response (LoR) questions which gave candidates the opportunity of demonstrating their knowledge and understanding of physics. It is important that candidates answer the question set in a logical way with clear explanations. Candidates should also make sure that they answer the question set.

There were also several 'show' questions on the paper. These types of questions prevent candidates who struggle with one part of a question being penalised on the next part. These 'show' questions do require candidates to clearly indicate their method. The unknown should be the subject of any equation – credit is not given for using the 'show' value. It is expected that equations will be rearranged.

<i>Candidates who did well on this paper generally did the following:</i>	<i>Candidates who did less well on this paper generally did the following:</i>
<ul style="list-style-type: none"> • demonstrated clear, detailed reasoning in explanation type questions • showed clear logical working in calculation type questions • used technical terms correctly • demonstrated an understanding of a practical physics course, particularly about the use of graphs and the treatment of uncertainties • used clear and sensible sketches • where possible explained their responses quantitatively. 	<ul style="list-style-type: none"> • omitted the detail needed in explaining concepts and understanding • did not use appropriate units in their quantities and were unsure of conversions • omitted steps in their calculations • were unsure of some technical terms and did not know definitions in detail • were unsure in the interpretation of graphs and the treatment of uncertainties • did not take care when adding to the diagrams.

Comments on responses by question type

Level of response questions

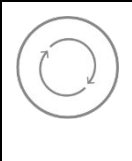
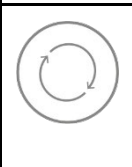

The two LoR questions were Question 4 and Question 8.

In Question 4, candidates were required to plan an experiment. A diagram should have been drawn which should indicate a workable experimental set-up. In this particular case, it was expected that candidates would include a method of support for the horizontal surface, a method to release the ball (e.g. a curved slope or a horizontal spring) and a method to determine the velocity as the ball left the horizontal surface. Most candidates indicated a rule to measure distance R . Candidates should also describe the method – perhaps indicating that R would be measured several times for same v and an average calculated. Safety precautions should also be included.

Some candidates suggested good methods of identifying where the ball would land, e.g. use sand or add paint to the ball. High achieving candidates clearly described how the velocity of the ball as it left the horizontal surface could be determined. Some used an energy conversion either of gravitational potential energy to kinetic energy or elastic strain energy to kinetic energy. Others suggested the use of either one or two light gates connected to a data-logger. In the case of using one light, the diameter of the ball would need to be determined while for two light gates, the gates should be positioned close to each other and the distance between the two light gates would need to be measured.

Most candidates suggested an appropriate graph to plot and then described how Q could be calculated using the gradient.

Question 8 tested an understanding of electron diffraction. Many candidates gave a good qualitative explanation of how the pattern would change. High achieving candidates clearly demonstrated how the de Broglie wavelength λ was related to the potential difference V by equating the energy eV to kinetic energy, then using the definition of momentum and the de Broglie wavelength. Some candidates confused speed v with potential difference V . Many candidates gave a good qualitative explanation. Many candidates did not state that the rings would become brighter.

	AfL	Candidates should be able to describe how to use light gates. In particular, candidates should be able to indicate the measurements that are needed to determine speed and acceleration. Candidates should state that the light gates should be connected to a timer or data-logger.
	AfL	When analysing experimental data, candidates should be able to determine appropriate graphs to plot which will give a straight line (if the given relationship is true). Candidates should also be able to describe how unknown quantities may be determined using the gradient and/or y-intercept.
	Misconception	There is some confusion between the equations to use for photoelectric effect and the equations to use when considering the de Broglie wavelength. For the de Broglie wavelength, a common misconception is to relate the energy to wavelength by the equation for the energy of a photon, $E = \frac{hc}{\lambda}$.

Other


In Question 1 (a)(ii), candidates were required to sketch the trace. While perfect drawings are not expected, since the grid is given, candidates should try to use it effectively. The amplitude should be two squares above and two squares below for the peaks and troughs respectively. Similarly, for the period (4cm) using the grid, candidates should be able to make sure that the drawing is consistent at the peak, trough and zero lines.

In Question 3, most candidates clearly identified the points on the line that were to be used for the gradient calculation. High achieving candidates clearly showed their working when determining the percentage uncertainty.

In Question 5 (b) some candidates were vague in their responses, for example, stating that the gradient changes rather than stating that the gradient decreases. In part (c) most candidates were able to draw a reasonable tangent. Parts (d) and (e) were harder to answer. Part (d) required the correct time interval to be applied by interpreting the braking time and not including the thinking time. In part (e), high achieving candidates applied the halving of the initial speed to the effect this had on the thinking distance, the thinking time, the braking distance and the braking time.

In Question 6 (a), most candidates answered this well although a significant minority confused the calculation of the volume. Answers such as $2\sqrt{5}$ did not score in (b)(i); it is expected that decimal fractions should be used. In 6 (b)(ii) high achieving candidates labelled the forces and correctly indicated the direction of the forces. Some candidates omitted to use the scale for their final response. In part (c), many candidates were confused in determining which forces and distances should be used.

High achieving candidates found Question 7 straightforward. Some candidates on (a)(iii) used N instead of n . Part (b) caused the most difficulty with candidates either using 150 W rather than 0.150 kW or changing the time to seconds.

	Misconception	The worst acceptable line is either the steepest line that passes within all the error bars or the shallowest error line that passes within all the error bars.
-------------------------------------------------------------------------------------	----------------------	-----------------------------------------------------------------------------------------------------------------------------------------------------------------

Common misconceptions

Electromagnetic waves travel in a vacuum at a constant speed of $3.0 \times 10^8 \text{ ms}^{-1}$.

The drawing of worst acceptable lines – see above.

Confusion about the determining the area A of a circle from the radius r or the diameter d :

$$A = \pi r^2 = \frac{\pi d^2}{4}$$

Moment of force = force \times perpendicular distance

Key teaching and learning points – comments on improving performance

Candidates should learn the prefixes for units. For example, in Question 1 (b)(i) many candidates seemed unsure of the difference between 200 nm and 200 pm.

Candidates should consider whether the values calculated are reasonable. For example, in Question 2(a)(ii) answers of $4.59 \times 10^8 \text{ ms}^{-1}$ (larger than the speed of light).

Candidates should be confident in find the gradient (and y-intercept) from a line on a graph. To determine the gradient:

1. Choose two points on the line which are easy to read-off. The points should be at least half the length of the line apart. Data points from the table should not be used unless the points are on the line.
2. Substitute the data points into

$$\text{gradient} = \frac{y_2 - y_1}{x_2 - x_1}$$

Answers should always be given as decimal fractions and to at least two significant figures.

Where quantitative data is given, then responses should wherever possible be answered quantitatively. For example, 2 (b)(ii), candidates should have calculated the critical angle. In Question 5 (e) the distances and times should have been calculated or compared in terms of halving/quartering.

Guidance on using this paper as a mock

The paper is a standard AS H156/02 paper.

Candidates will have plenty of opportunity to demonstrate their knowledge and understanding. There are several practical skills which are also tested.

When reviewing the mock paper, candidates will have the opportunity of learning from the key points indicated above.

Supporting you

Review of results

If any of your students' results are not as expected, you may wish to consider one of our review of results services. For full information about the options available visit the [OCR website](#). If university places are at stake you may wish to consider priority service 2 reviews of marking which have an earlier deadline to ensure your reviews are processed in time for university applications.

Supporting you through 2020-2021

Our priority is supporting you and your students this autumn and to support you as you prepare for summer 2021 exams. We'll update our [website information](#) regularly with resources, guidance and key information.

Take a look at our support for:

- [Teachers](#)
- [Students](#)
- [Exams officers](#)
- [Assessment specialists](#)

Keep up-to-date

We are sending a weekly roundup to tell you about important updates. You can also sign up for your subject specific updates. If you haven't already, [sign up here](#).

OCR Professional Development

Attend one of our popular CPD courses to hear directly from a senior assessor or drop in to a Q&A session. All our courses for the academic year 2020-2021 are being delivered live via an online platform, so you can attend from any location.

Please find details for all our courses on the relevant subject page on our [website](#) or visit [OCR professional development](#).

Signed up for Exambuilder?

ExamBuilder is the question builder platform for a range of our GCSE, A Level, Cambridge Nationals, Cambridge Technicals and Functional Skills qualifications. See the full list of available qualifications in the [sign up form](#).

ExamBuilder is **free for all OCR centres** with an Interchange account and gives you unlimited users per centre. We need an [Interchange](#) username to validate the identity of your centre's first user account for ExamBuilder.

If you do not have an Interchange account please contact your centre administrator (usually the Exams Officer) to request a username, or nominate an existing Interchange user in your department.

Need to get in touch?

If you ever have any questions about OCR qualifications or services (including administration, logistics and teaching) please feel free to get in touch with our Customer Support Centre.

General qualifications

01223 553998

general.qualifications@ocr.org.uk

Vocational qualifications

02476 851509

vocational.qualifications@ocr.org.uk

For more information visit

 ocr.org.uk/i-want-to/find-resources/

 ocr.org.uk

 [/ocrexams](https://www.facebook.com/ocrexams)

 [/ocrexams](https://twitter.com/ocrexams)

 [/company/ocr](https://www.linkedin.com/company/ocr)

 [/ocrexams](https://www.youtube.com/ocrexams)

We really value your feedback

Click to send us an autogenerated email about this resource. Add comments if you want to. Let us know how we can improve this resource or what else you need. Your email address will not be used or shared for any marketing purposes.



I like this



I dislike this



OCR is part of Cambridge Assessment, a department of the University of Cambridge.

For staff training purposes and as part of our quality assurance programme your call may be recorded or monitored. © OCR 2020 Oxford Cambridge and RSA Examinations is a Company Limited by Guarantee. Registered in England. Registered office The Triangle Building, Shaftesbury Road, Cambridge, CB2 8EA. Registered company number 3484466. OCR is an exempt charity.

OCR operates academic and vocational qualifications regulated by Ofqual, Qualifications Wales and CCEA as listed in their qualifications registers including A Levels, GCSEs, Cambridge Technicals and Cambridge Nationals.

OCR provides resources to help you deliver our qualifications. These resources do not represent any particular teaching method we expect you to use. We update our resources regularly and aim to make sure content is accurate but please check the OCR website so that you have the most up to date version. OCR cannot be held responsible for any errors or omissions in these resources.

Though we make every effort to check our resources, there may be contradictions between published support and the specification, so it is important that you always use information in the latest specification. We indicate any specification changes within the document itself, change the version number and provide a summary of the changes. If you do notice a discrepancy between the specification and a resource, please [contact us](#).

You can copy and distribute this resource freely if you keep the OCR logo and this small print intact and you acknowledge OCR as the originator of the resource.

OCR acknowledges the use of the following content: N/A

Whether you already offer OCR qualifications, are new to OCR or are thinking about switching, you can request more information using our [Expression of Interest form](#).

Please [get in touch](#) if you want to discuss the accessibility of resources we offer to support you in delivering our qualifications.